

Assignment 1

MUAR 201

Answer key

1. Write the name of the note that is a semitone above the following notes. (There are two possible names):

- a) G: $\overset{b}{G}$ E^x A^{bb}
b) C: $C^\#$ D^b B^x
c) A: B C^b A^x
d) D: $D^\#$ E^b F^{bb}


8

4. Write the name of the note that is a semitone below the following notes. (There are two possible names):


- a) E: E^b $D^\#$, F^{bb}
b) A: A^b $G^\#$
c) G: G^b $F^\#$ E^x
d) B: B^b $A^\#$ C^{bb}

8

5. Name the notes. Be careful to check the clef at the beginning of each line!

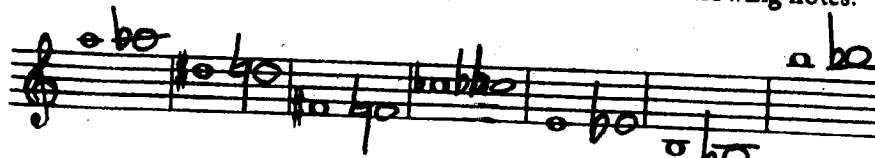
$\#$ 
G D A E $F^\#$ B G^b G E B^b $D^\#$ D^b $G^\#$ C A E

32


G E A A^b D A $A^\#$ G^b D C G^b G D F D^b

6. Write the note that is a chromatic semitone below the following notes.

7



- Write the note that is a diatonic semitone above the following notes.

7



