

1. (10 points) Short Answer Questions

a) Provide the name or formula for the following: (2 pts)

Na₂SO₄•10 H₂O sodium sulfate decahydrate

lithium cyanide LiCN

b) You take a 1.0 L volume of gas at 250 K. You expand the gas to a 2.0 L volume and simultaneously heat the vessel to 500 K. The pressure of the gas: (circle one) (1 pt)

DOUBLES

HALVES

QUADRUPLES

STAYS CONSTANT

c) Four balloons are filled to the same volume with one of the following gases. If a small hole is made in each balloon, which one will deplete faster? (circle one) (1 pt)

Xe

N₂O


Kr

SO₂

d) Give the precise chemical symbol for the following: (1 pt)

Number of protons	Number of electrons	Number of neutrons	Chemical Symbol
17	18	20	${}^{37}_{17}\text{Cl}^-$

e) The standard heat of formation of solid calcium carbonate is –1207.6 kJ. Write the chemical equation for the reaction to which this value applies (include phases). (1 pt)



f) Indicate the oxidation state of the underlined atom: (2 pts)

ClO₃⁻ : +5Fe(CN)₆⁴⁻ : +2g) Number of atoms in 0.205 mol of CaCl₂: (1 pt) 3.70 × 10²³ atoms

h) How much heat (in kJ) must be transferred to a 1.5 L of water in a pot to raise its temperature from 25 °C to 95 °C: (1 pt) + 439 kJ (q = msΔT)

2. (10 points) A parachute manufacturer decides to start making its own adipic acid ($\text{H}_2\text{C}_6\text{H}_8\text{O}_4$), one of the main components of nylon polymers. It uses a controlled reaction between cyclohexane (C_6H_{12}) and O_2 shown here (not balanced):



MM = 84.16 g/mol 32.00 g/mol 146.1 g/mol

The reaction uses 30.0 g of cyclohexane and 30.0 g of oxygen, and allows the isolation of 42.3 g of adipic acid. What are the theoretical yield of adipic acid and the % yield of the reaction?

DETERMINING THE LIMITING REAGENT:

$30.0 \text{ g C}_6\text{H}_{12} = 0.356 \text{ mol}$ $30.0 \text{ g O}_2 = 0.938 \text{ mol}$ $\text{Ideal mol ratio: } = \frac{\text{O}_2}{\text{C}_6\text{H}_{12}} = \frac{5 \text{ O}_2}{2 \text{ C}_6\text{H}_{12}} = 2.5$ $\text{Actual mol ratio: } = \frac{\text{O}_2}{\text{C}_6\text{H}_{12}} = \frac{0.938 \text{ mol}}{0.356 \text{ mol}} = 2.63 > 2.5$ <p>Hence: C_6H_{12} is limiting (small excess of O_2)</p>
--

THEORETICAL YIELD:

$? \text{ g acid} = 30.0 \text{ g C}_6\text{H}_{12} \cdot \frac{\text{mol C}_6\text{H}_{12}}{84.16 \text{ g C}_6\text{H}_{12}} \cdot \frac{1 \text{ mol acid}}{1 \text{ mol C}_6\text{H}_{12}} \cdot \frac{146.1 \text{ g acid}}{\text{mol acid}}$ $= 52.1 \text{ g adipic acid}$

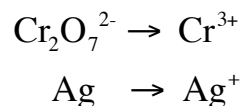
ACTUAL YIELD:

$\% \text{ yield} = \frac{\text{actual yield}}{\text{theoretical yield}} \cdot 100\% = \frac{42.3 \text{ g}}{52.1 \text{ g}} \cdot 100\%$ $= 81.1 \%$

Theoretical Yield: **52.1 g**

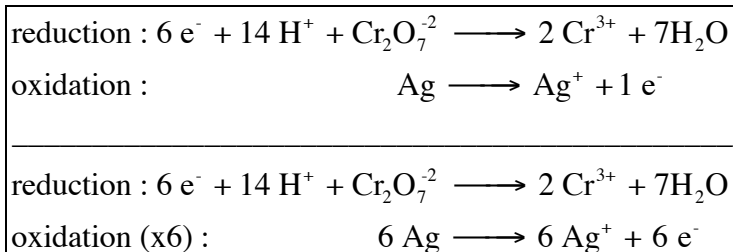
% Yield: **81.1 %**

3. (10 points) In photography, black and white transparencies (black pictures on a transparent background) are produced from the oxidation (*bleaching*) of the metallic silver covering the film to silver ions. Dichromate ions are commonly used as oxidizing agents, in an acidic solution. The following half reactions are involved in the redox process:

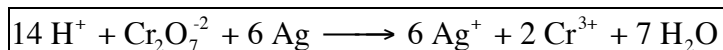


a) Determine the overall balanced redox reaction equation. (6 pts)

HALF-REACTIONS AND BALANCING OF ELECTRONS:



OVERALL BALANCED REDOX:



b) A black and white negative film is covered with 4.60 g of metallic silver. What is the minimum volume (in mL) of a 0.350 M $\text{K}_2\text{Cr}_2\text{O}_7$ that must be added to the bleaching bath to ensure a complete oxidation of the metallic silver present? (4 pts)

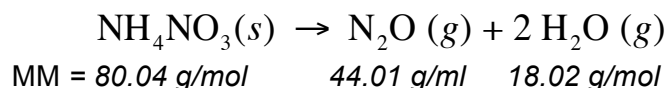
SOLUTION:

$$\begin{aligned} ? \text{ mL of } \text{K}_2\text{Cr}_2\text{O}_7 &= 4.60 \text{ g Ag} \cdot \frac{\text{mol Ag}}{107.8 \text{ g Ag}} \cdot \frac{1 \text{ mol } \text{K}_2\text{Cr}_2\text{O}_7}{6 \text{ mol Ag}} \cdot \frac{1 \text{ L}}{0.350 \text{ mol } \text{K}_2\text{Cr}_2\text{O}_7} \cdot \frac{1000 \text{ mL}}{\text{L}} \\ &= 20.3 \text{ mL of } \text{K}_2\text{Cr}_2\text{O}_7 \text{ solution} \end{aligned}$$

Answer:

20.3 mL

4. (10 points) A 4.15 g sample of ammonium nitrate is introduced into an evacuated 2.50 L flask and then sealed and heated to 250 °C, causing the following decomposition:



a) What is the total gas pressure *in mmHg* in the flask once the $\text{NH}_4\text{NO}_3(s)$ has completely decomposed (assume a complete conversion to the products)? (5 pts)

$$? \text{ mol gas formed} = 4.15 \text{ g NH}_4\text{NO}_3 \cdot \frac{\text{mol NH}_4\text{NO}_3}{80.04 \text{ g NH}_4\text{NO}_3} \cdot \frac{3 \text{ mol of gas formed}}{1 \text{ mol NH}_4\text{NO}_3} = 0.1555 \text{ mol of gas}$$

$$\text{since } PV = nRT, \quad P = \frac{nRT}{V} = \frac{0.1555 \text{ mol} \cdot 0.08206 \frac{\text{atm L}}{\text{K mol}} \cdot 523 \text{ K}}{2.50 \text{ L}} = 2.67 \text{ atm}$$

$$P(\text{in mmHg}) = 2.67 \text{ atm} \cdot \frac{760 \text{ mmHg}}{\text{atm}} = 2029 \text{ mmHg}$$

Answer: **2.03 x 10³ mmHg**

b) Pure $\text{N}_2\text{O}(g)$ (also known as nitrous oxide or laughing gas) can be used in a mixture with $\text{O}_2(g)$ as an anesthetic. In a particular mixture of this type, the partial pressures of $\text{N}_2\text{O}(g)$ and $\text{O}_2(g)$ are 612 mmHg and 154 mmHg respectively. Calculate the mass percentage of O_2 in the mixture. (MM O_2 = 32.00 g/mol) (5 pts)

MOLAR FRACTIONS:

$$\chi_{\text{N}_2\text{O}} = \frac{P_{\text{N}_2\text{O}}}{P_{\text{total}}} = \frac{612 \text{ mmHg}}{760 \text{ mmHg}} = 0.799$$

$$\chi_{\text{O}_2} = \frac{P_{\text{O}_2}}{P_{\text{total}}} = \frac{154 \text{ mmHg}}{760 \text{ mmHg}} = 0.201$$

MOLAR MASS FOR 1 MOL OF GAS:

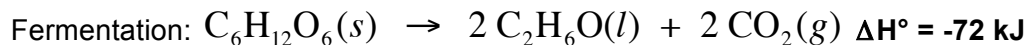
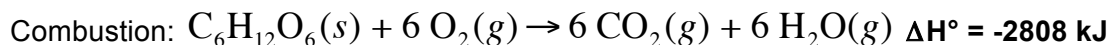
$$MM = 0.799 \cdot 44.01 \text{ g/mol} + 0.201 \cdot 32.00 \text{ g/mol} = 41.60 \text{ g/mol}$$

MOLAR MASS FOR 1 MOL OF GAS:

$$\% \text{ O}_2 = \frac{\text{mass of O}_2 \cdot 100\%}{\text{MM of gas}} = \frac{\chi_{\text{O}_2} \cdot \text{MM of O}_2 \cdot 100\%}{\text{MM of gas}} = \frac{0.201 \cdot 32.00 \text{ g/mol} \cdot 100\%}{41.60 \text{ g/mol}} = 15.5 \%$$

Answer: **15.5 %**

5. (10 points) The standard enthalpies for the combustion of glucose ($C_6H_{12}O_6$) and for the fermentation of glucose to ethanol (C_2H_6O) are shown below:



a) How much work is performed by the system during the combustion of glucose at 25 °C? (3 pts)

$$\begin{aligned} \Delta n &= \# \text{ mol gas in products} - \# \text{ mol gas in reactants} \\ &= 12 \text{ mol} - 6 \text{ mol} = 6 \text{ mol} \end{aligned}$$

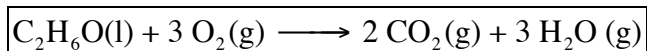
$$\begin{aligned} W_{\text{system}} &= -P\Delta V = -\Delta nRT = -6 \text{ mol} \cdot 8.31451 \text{ J K}^{-1} \text{ mol}^{-1} \cdot 298 \text{ K} \\ &= -14873 \text{ J} = -14.873 \text{ kJ} \end{aligned}$$

Answer: **-14.9 kJ**

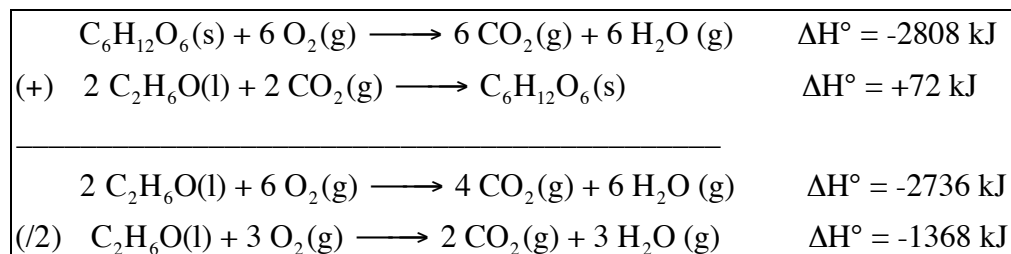
b) Explain briefly the significance of the sign (+ or -) of your answer in a). (2 pts)

(-) negative work is done by the system on the surroundings (expansion of the gas)

c) Provide a balanced equation that shows the combustion of ethanol $C_2H_6O(l)$. (2 pts)



d) Use the standard enthalpies of the reactions provided in the question to calculate the standard enthalpy for the combustion of 1 mol of ethanol $C_2H_6O(l)$. (3 pts)



Answer: **-1368 kJ**